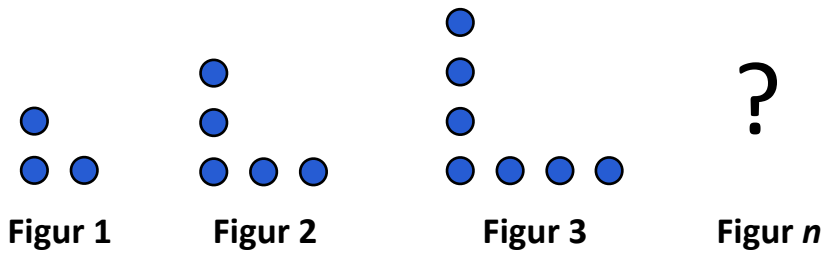


Mönster



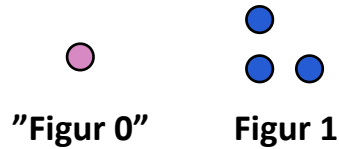
- 1 Räkna **antalet** i varje figur

3 kulor 5 kulor 7 kulor

- 2 Beräkna **differensen** mellan figurerna

$5 - 3 = 2$ eller $7 - 5 = 2$

- 3 Beräkna **starttalet**, antalet i "figur 0"



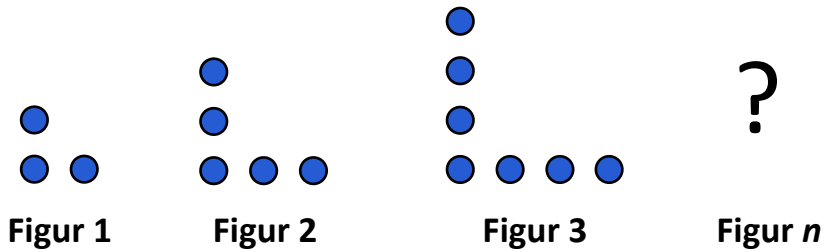
1 3 kulor

$3 - 2 = 1$

- 4 Skriv uttrycket **differensen** $\cdot n$ + **starttalet**

$2n + 1$

Mönster



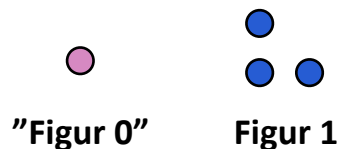
- 1 Räkna **antalet** i varje figur

3 kulor 5 kulor 7 kulor

- 2 Beräkna **differensen** mellan figurerna

$5 - 3 = 2$ eller $7 - 5 = 2$

- 3 Beräkna **starttalet**, antalet i "figur 0"

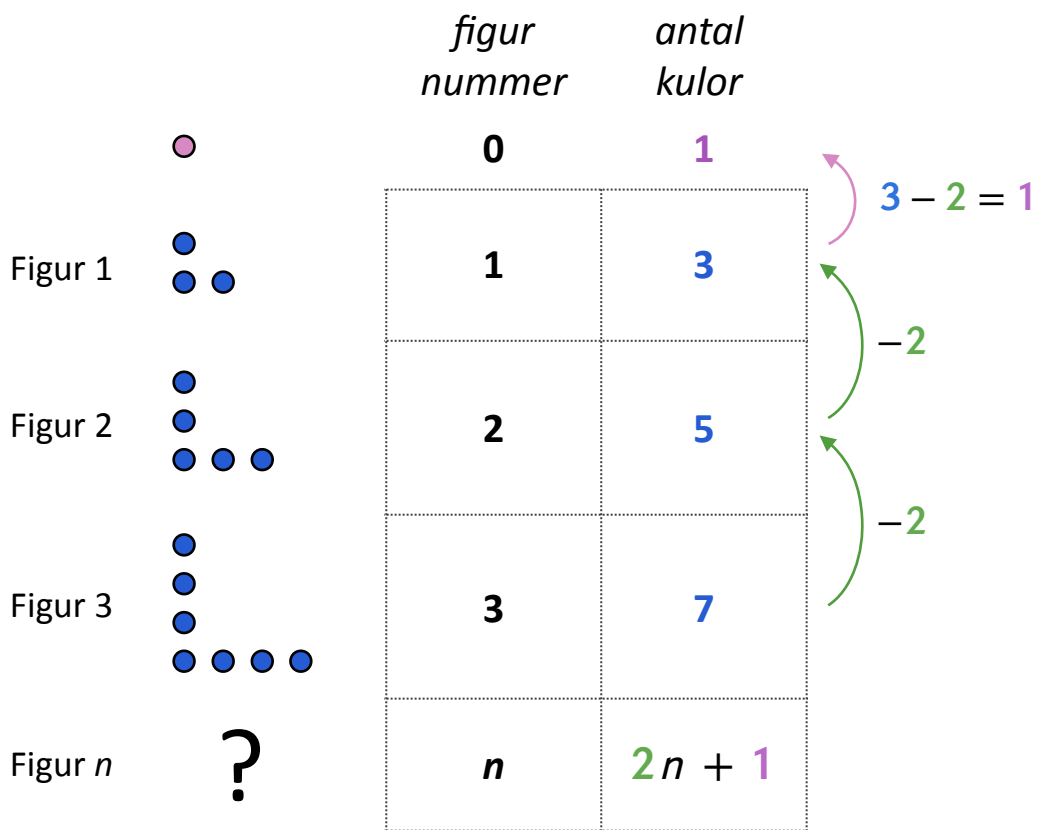


1 3 kulor

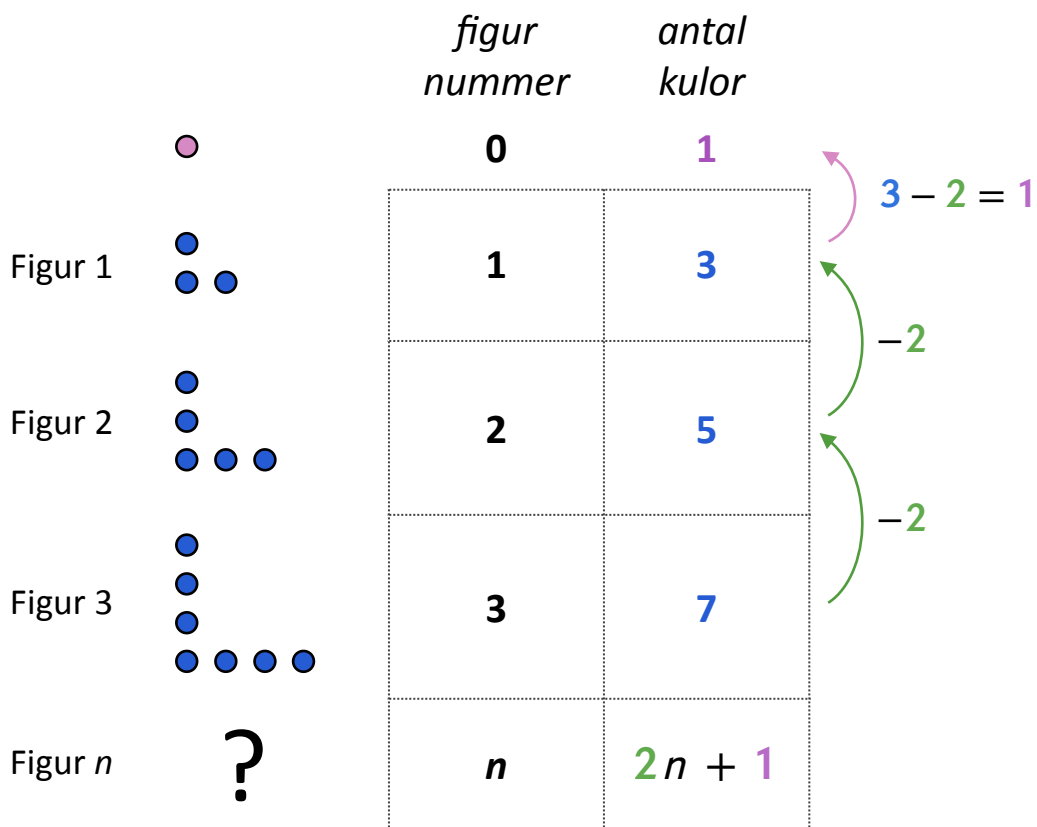
$3 - 2 = 1$

- 4 Skriv uttrycket **differensen** $\cdot n$ + **starttalet**

$2n + 1$



differensen • figures nummer + **starttalet**



differensen • figures nummer + **starttalet**